

Mathematics 172 Homework

The solution for these problems are after the last problem.

1. For the system of differential equations

$$\begin{aligned}\frac{dx}{dt} &= .4x \left(\frac{100 - x - .4y}{100} \right) \\ \frac{dy}{dt} &= .6x \left(\frac{200 - x - .8y}{200} \right)\end{aligned}$$

draw the phase plane (which for us is just a fancy term for the first quadrant of the x - y plane) showing

(a) The lines where $\frac{dx}{dt} = 0$,

(b) The lines where $\frac{dy}{dt} = 0$,

(c) The coordinates of all the equilibrium points in the first quadrant. Also say which of the equilibrium points are stable and if which of competitive coexistence, competitive exclusion, x -species dominants, or y -species dominants holds.

2. For the system of differential equations

$$\begin{aligned}\frac{dx}{dt} &= .23x \left(\frac{100 - x - 1.5y}{100} \right) \\ \frac{dy}{dt} &= .07x \left(\frac{150 - x - 4y}{150} \right)\end{aligned}$$

draw the phase plane showing

(a) The lines where $\frac{dx}{dt} = 0$,

(b) The lines where $\frac{dy}{dt} = 0$,

(c) The coordinates of all the equilibrium points in the first quadrant. Also say which of the equilibrium points are stable and if which of competitive coexistence, competitive exclusion, x -species dominants, or y -species dominants holds.

3. For the system of differential equations

$$\begin{aligned}\frac{dx}{dt} &= .15x \left(\frac{300 - x - .7y}{300} \right) \\ \frac{dy}{dt} &= .2x \left(\frac{250 - x - 4y}{250} \right)\end{aligned}$$

draw the phase plane showing

(a) The lines where $\frac{dx}{dt} = 0$,

(b) The lines where $\frac{dy}{dt} = 0$,

(c) The coordinates of all the equilibrium points in the first quadrant. Also say which of the equilibrium points are stable and if which of competitive coexistence, competitive exclusion, x -species dominants, or y -species dominants holds.

4. For the system of differential equations

$$\begin{aligned}\frac{dx}{dt} &= .14x \left(\frac{100 - x - 3y}{100} \right) \\ \frac{dy}{dt} &= .3x \left(\frac{80 - x - .4y}{80} \right)\end{aligned}$$

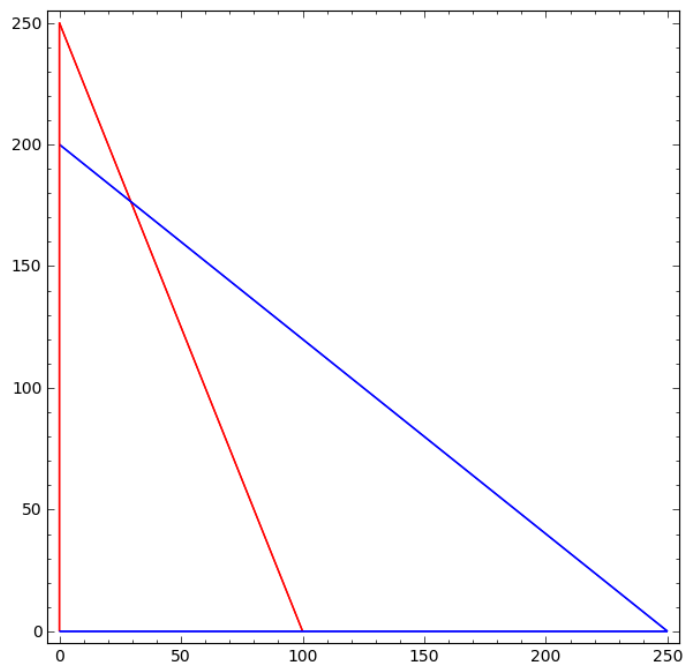
draw the phase plane showing

(a) The lines where $\frac{dx}{dt} = 0$,

(b) The lines where $\frac{dy}{dt} = 0$,

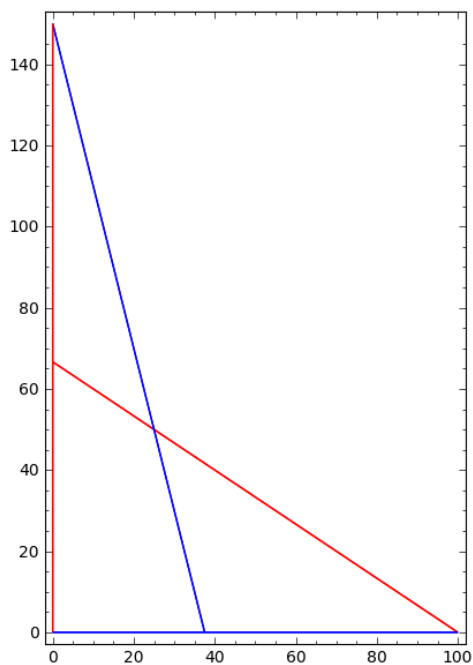
(c) The coordinates of all the equilibrium points in the first quadrant. Also say which of the equilibrium points are stable and if which of competitive coexistence, competitive exclusion, x -species dominants, or y -species dominants holds.

Solution to 1:



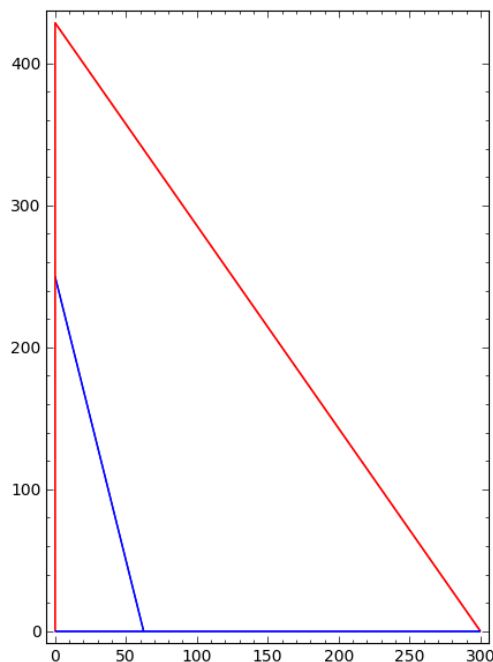
(a) The $dx/dt = 0$ lines are in red. (b) The $dy/dx = 0$ lines are in blue. The equilibrium points are $(0, 0)$, $(100, 0)$, $(0, 200)$, and $(29.41, 176.5)$. The point (29.41) is stable and this is competitive coexistence.

Solution to 2:



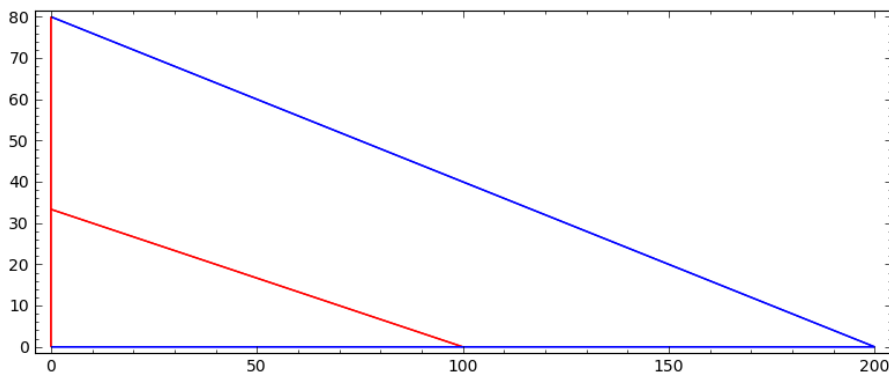
(a) The $dx/dt = 0$ lines are in red. (b) The $dy/dx = 0$ lines are in blue. The equilibrium points are $(0,0)$, $(100,0)$, $(0,150)$, and $(25.00, 50.00)$. The points $(100,0)$ and $(0,150)$ are stable. This is competitive exclusion.

Solution to 3:



(a) The $dx/dt = 0$ lines are in red. (b) The $dy/dx = 0$ lines are in blue. The equilibrium points are $(0,0)$, $(300,0)$, and $(0,250)$. The equilibrium point $(300,0)$ is stable. Here the x -species is dominant.

Solution to 4:



(a) The $dx/dt = 0$ lines are in red. (b) The $dy/dx = 0$ lines are in blue. The equilibrium points are $(0,0)$, $(100,0)$, and $(0,80)$. The point $(0,80)$ is stable. Here the y -species is dominant.